

# DM534 — Øvelser Uge 44

## Introduktion til Datalogi, Efterår 2021

Jonas Vistrup og Rolf Fagerberg

---

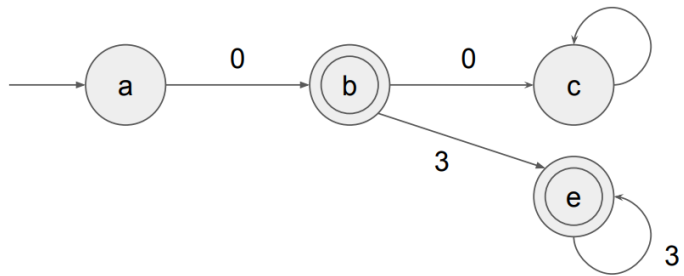
### 1 I

Start med at repetere følgende definitioner fra slides:

- En Deterministic Finite Automaton (DFA).
- At en DFA accepterer en streng.
- Sproget bestemt af en DFA.
- En Context-Free Grammar (CFG).
- At en CFG udleder (derives) en streng.
- Sproget bestemt af en CFG.

#### 1.1

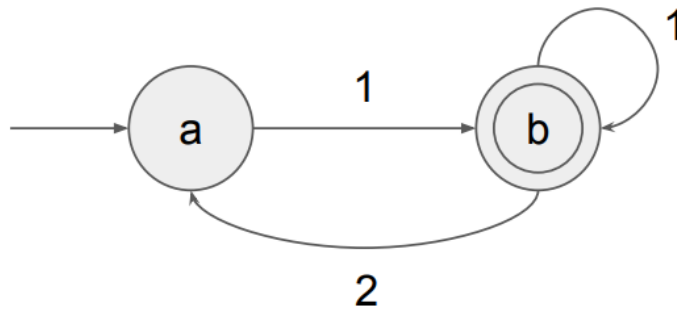
What is the language of the following DFA?



**SVAR:** 0 og så nul eller flere 3'er.

#### 1.2

What is the language of the following DFA?

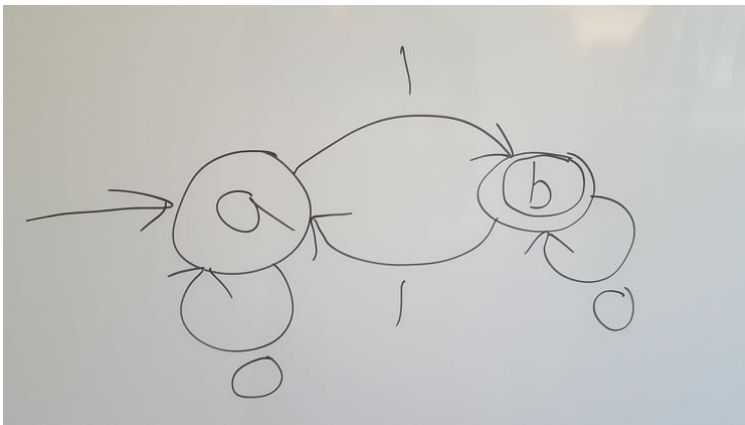


**SVAR:** 1 mindst en gang, hvis der er et 2, så skal det efterfølges af mindst et 1.

### 1.3

Define a DFA that recognises the following language: All strings of 0s and 1s that contain an odd number of 1s and any number of 0s.

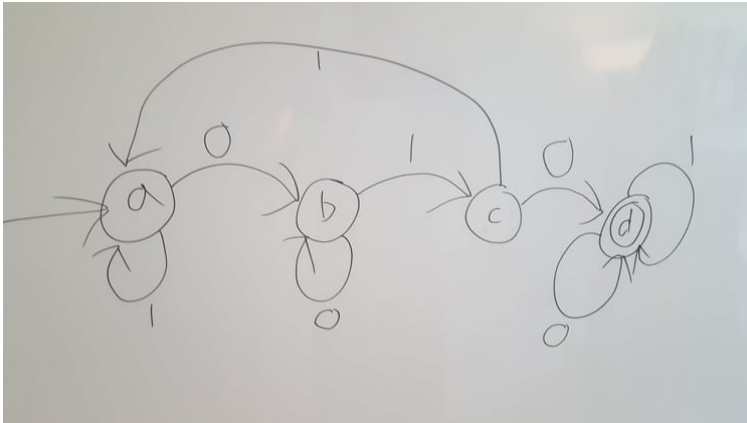
**SVAR:**



### 1.4

Define a DFA that recognises the following language: All strings of 0s and 1s that contain the string 010.

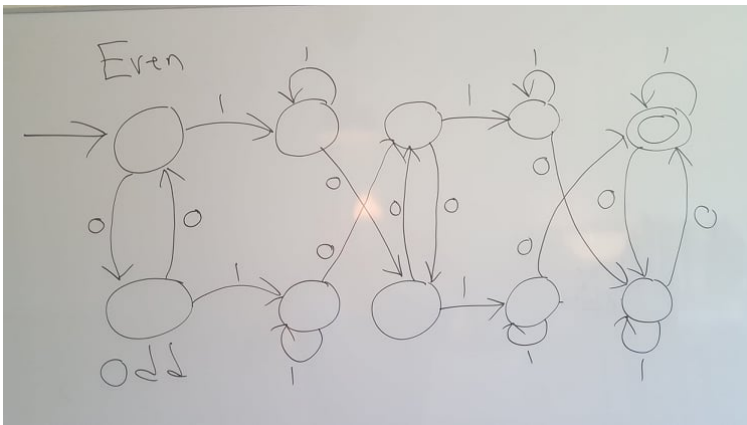
**SVAR:**



**1.5**

Define a DFA that recognises the following language: All strings of 0s and 1s that contain at least two occurrences of 10 and an even number of 0s.

**SVAR:**



**1.6**

What is the language of the following CFG?

$$S \rightarrow ab$$

$$S \rightarrow SS$$

**SVAR:**  $(ab)^+$ . At least one repeat of the string  $ab$ .

**1.7**

Write two different derivations for the string 0001111 with the following CFG. (Same end result, but some different intermediate steps.)

$$S \rightarrow 0M1$$

$$M \rightarrow M1$$

$$M \rightarrow 0M$$

$$M \rightarrow 0$$

$$M \rightarrow 1$$

**SVAR:**

$$S \rightarrow 0M1 \rightarrow 00M1 \rightarrow 000M1 \rightarrow 000M11 \rightarrow 000M111 \rightarrow 0001111$$

$$S \rightarrow 0M1 \rightarrow 0M11 \rightarrow 0M111 \rightarrow 0M1111 \rightarrow 00M1111 \rightarrow 0001111$$

## 1.8

What is the language of the following CFG?

$$S \rightarrow 0MM1$$

$$M \rightarrow 0M$$

$$M \rightarrow 1M$$

$$M \rightarrow 0$$

$$M \rightarrow 1$$

**SVAR:** Any 0-1 string that starts with 0 and ends with 1 of at least length 4.

## 2 II

### 2.1

Define a CFG that recognizes the following language: All strings of 0s and 1s consisting of  $n$  0s followed by  $n$  1s. Examples: 0011 is OK, 1100 is not OK, 011 is not OK.

**SVAR:**

$$S \rightarrow 0S1$$

$$S \rightarrow 01$$

## 2.2

Define a DFA that recognises the same language of this CFG:

$$S \rightarrow 0M$$

$$S \rightarrow 1$$

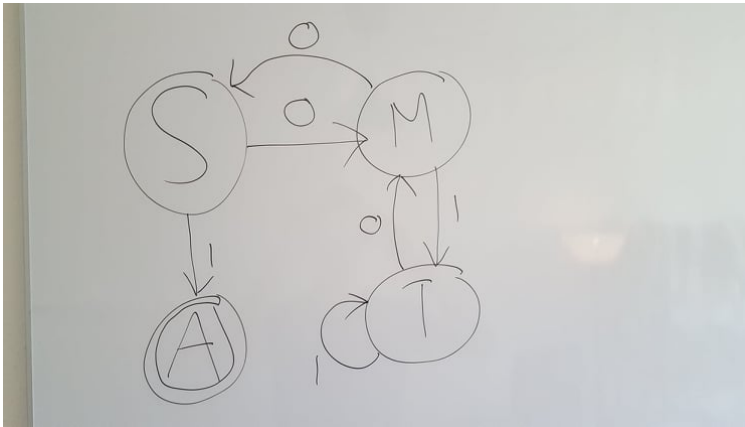
$$M \rightarrow 0S$$

$$M \rightarrow 1T$$

$$T \rightarrow 0M$$

$$T \rightarrow 1T$$

**SVAR:**



## 2.3

Define a CFG that recognises the following language: All strings of arithmetic additions that contain numbers, the + sign, and (balanced) parentheses. Examples: (0+1) is OK, (2+(3))+4 is OK, 2+3(2) is not OK.

**SVAR:**

$$S \rightarrow E$$

$$E \rightarrow (E)$$

$$E \rightarrow E + E$$

$$E \rightarrow N$$

$$N \rightarrow NN$$

$$N \rightarrow 0|1|2|3|4|5|6|7|8|9$$